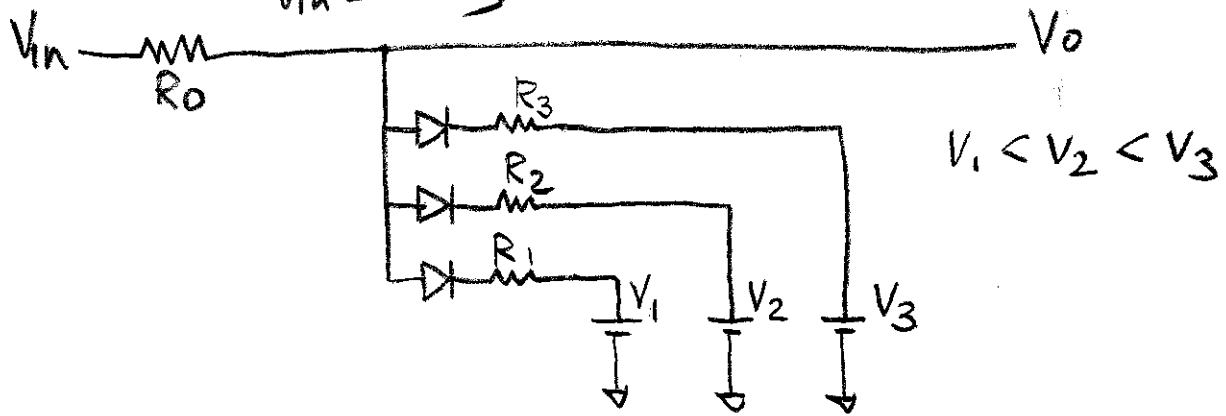
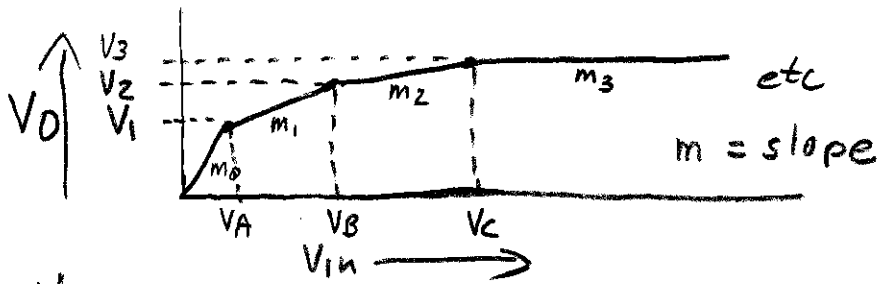


SIMPLE PIECEWISE LINEAR COMPRESSION CIRCUIT

K. KUHN

Dec 26-2004



Analysis: (FIND $V_A, V_B, +V_C$)

We will assume ideal diodes for simplicity of illustration. A good diode model is 0.56 V in series with 33 ohms.

$$\begin{aligned}
 m_0 &= 1 \\
 V_A &= 0 + \frac{(V_1 - 0)}{m_1} = V_1 \\
 m_1 &= R_1 / (R_0 + R_1) \\
 V_B &= V_A + \frac{(V_2 - V_1)}{m_1} \\
 m_2 &= R_1 || R_2 / (R_0 + R_1 || R_2) \\
 V_C &= V_B + \frac{(V_3 - V_2)}{m_2} \\
 m_3 &= R_1 || R_2 || R_3 / (R_0 + R_1 || R_2 || R_3)
 \end{aligned}$$

Analytic Equations

The diode voltage adds to V_1, V_2, V_3 and the diode resistance adds to R_1, R_2, R_3

For any input voltage, V_{in} , V_o can be found by first determining the voltage range, $V_A \rightarrow V_B$, $V_B \rightarrow V_C$, etc. that brackets the input voltage. Then interpolate between the corresponding V_1, V_2, V_3 , etc. For example, if V_{in} is between V_A and V_B then $V_o = \left(\frac{V_{in} - V_A}{V_B - V_A} \right) * (V_2 - V_1) + V_1$

Design:

The pairs of voltages, $(V_A, V_1), (V_B, V_2), (V_C, V_3)$, etc. have been determined by some means for a good fit to a desired function. The problem is to determine the required resistors. The basic procedure is to pick a value for R_o and then use ratios to calculate R_1, R_2, R_3 , etc. We reverse the analytic equations.

$$m_1 = \frac{V_2 - V_1}{V_B - V_A} = \frac{R_1}{R_o + R_1} = \frac{(R_1/R_o)}{1 + (R_1/R_o)} \quad \left| \begin{array}{l} R_1 \text{ is only} \\ \text{unknown} \end{array} \right.$$

$$\frac{R_1}{R_o} = \frac{m_1}{1 - m_1} \quad \boxed{R_1 = R_o \left(\frac{m_1}{1 - m_1} \right)}$$

$$m_2 = \frac{V_3 - V_2}{V_C - V_A} = \frac{R_1 \parallel R_2}{R_o + R_1 \parallel R_2} = \frac{R_1 \parallel R_2 / R_o}{1 + \frac{R_1 \parallel R_2}{R_o}} \quad \left| \begin{array}{l} R_2 \text{ is only} \\ \text{unknown} \end{array} \right.$$

$$\frac{R_1 \parallel R_2}{R_o} = \frac{m_2}{1 - m_2}$$

$$\boxed{R_1 \parallel R_2 = R_o \left(\frac{m_2}{1 - m_2} \right)}$$

$$\boxed{R_2 = \frac{1}{\frac{1}{(R_1 \parallel R_2)} - \frac{1}{R_1}}}$$

$$m_3 = \frac{V_4 - V_3}{V_D - V_C} = \frac{R_1 \parallel R_2 \parallel R_3}{R_0 + R_1 \parallel R_2 \parallel R_3} = \frac{(R_1 \parallel R_2 \parallel R_3 / R_0)}{1 + \frac{(R_1 \parallel R_2 \parallel R_3)}{R_0}}$$

R_3 is only unknown

$$\frac{R_1 \parallel R_2 \parallel R_3}{R_0} = \frac{m_3}{1 - m_3}$$

$$R_1 \parallel R_2 \parallel R_3 = R_0 \left(\frac{m_3}{1 - m_3} \right)$$

$$R_3 = \frac{1}{\frac{1}{R_1 \parallel R_2 \parallel R_3} - \frac{1}{R_1 \parallel R_2}}$$

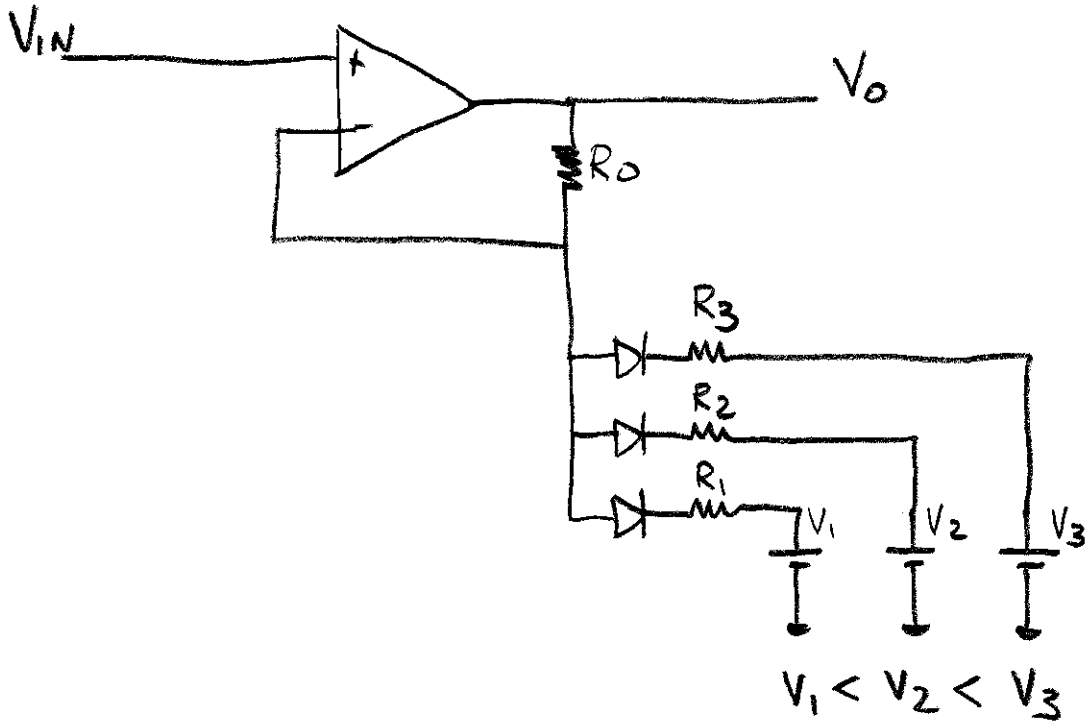
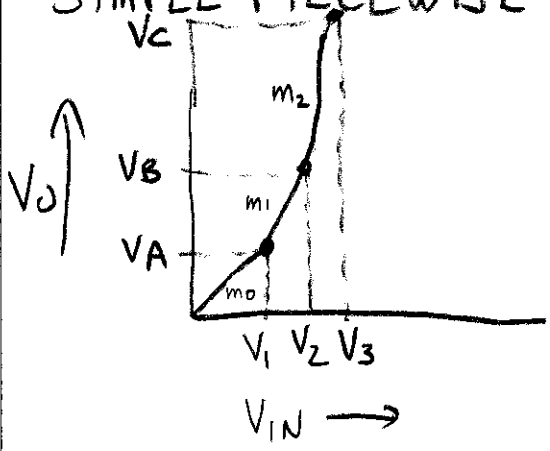
(Already known from earlier calculations)

This same pattern continues for as many segments as exist

SIMPLE PIECEWISE LINEAR EXPANSION CIRCUIT

K. KUHN

12-26-04



Analysis (Find V_A , V_B , + V_C)

$$m_0 = 1$$

$$V_A = 0 + (V_1 - 0)m_0 = V_1$$

$$m_1 = 1 + \frac{R_0}{R_1}$$

$$V_B = V_A + (V_2 - V_1)m_1$$

$$m_2 = 1 + R_0/R_1 \parallel R_2$$

$$V_C = V_B + (V_3 - V_2)m_2$$

$$m_3 = 1 + R_0/R_1 \parallel R_2 \parallel R_3$$

Analytic Equations

For any input voltage, V_{in} , V_o can be found by first determining the voltage range, $V_1 \rightarrow V_2$, $V_2 \rightarrow V_3$, etc. that brackets the input voltage. Then interpolate between the corresponding V_A, V_B, V_C , etc. For example, if V_{in} is between V_1 and V_2 then $V_o = \left(\frac{V_{in} - V_1}{V_2 - V_1} \right) * (V_B - V_A) + V_A$.

Design:

The pairs of voltages, (V_1, V_A) , (V_2, V_B) , (V_3, V_C) , etc. have been determined by some means for a good fit to a desired function. The problem is to determine the required resistors. The basic procedure is to pick a value for R_o and then use ratios to calculate R_1, R_2, R_3 , etc. We reverse the analytic equations.

$$m_1 = \frac{V_B - V_A}{V_2 - V_1} = 1 + \frac{R_o}{R_1} \quad R_1 \text{ is only unknown}$$

$$\frac{R_o}{R_1} = m_1 - 1$$

$$R_1 = \frac{R_o}{m_1 - 1}$$

$$m_2 = \frac{V_C - V_B}{V_3 - V_2} = 1 + \frac{R_o}{R_1 \parallel R_2} \quad R_2 \text{ is only unknown}$$

$$\frac{R_0}{R_1 \parallel R_2} = m_2 - 1$$

$$R_1 \parallel R_2 = \frac{R_0}{m_2 - 1}$$

$$R_2 = \frac{1}{\frac{1}{R_1 \parallel R_2} - \frac{1}{R_1}}$$

← already known

$$m_3 = \frac{V_D - V_C}{V_A - V_3} = 1 + \frac{R_0}{R_1 \parallel R_2 \parallel R_3}$$

$$\frac{R_0}{R_1 \parallel R_2 \parallel R_3} = m_3 - 1$$

$$R_1 \parallel R_2 \parallel R_3 = \frac{R_0}{m_3 - 1}$$

$$R_3 = \frac{1}{\frac{1}{R_1 \parallel R_2 \parallel R_3} - \frac{1}{R_1 \parallel R_2}}$$

← already known

This same pattern continues for as many segments as exist

Homework for Non-linear Circuits

1. Compression:

Design a three segment non-linear circuit to implement the following table, Use the circuit in the notes on compression. Let $R_3 = 10k$

| V_{in} | V_o | | Find: |
|----------|-------|---------------|------------|
| 0 | 0 |) 1st segment | V_1, V_2 |
| 1.0 | 1.0 | | |
| 3.0 | 2.0 |) 2nd segment | R_1, R_2 |
| 10.0 | 5.0 | | |
| | |) 3rd segment | |

2 Expansion

Design a three segment non-linear circuit to implement the following table, Use the circuit in the notes on expansion. Let $R_3 = 10k$

| V_{in} | V_o | | Find: |
|----------|-------|---------------|------------|
| 0 | 0 |) 1st segment | V_1, V_2 |
| 2.0 | 2.0 | | |
| 3.0 | 4.0 |) 2nd segment | R_1, R_2 |
| 4.0 | 10.0 | | |
| | |) 3rd segment | |

Hint: Develop a design method for each of these. You will need it on the final!